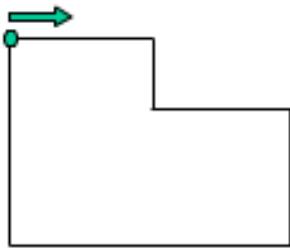


Messe die Formen nach. Wie groß ist der jeweilige Umfang?

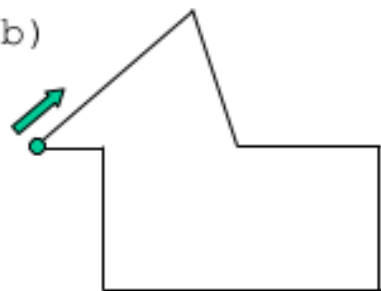
a)



$$\underline{\quad} \text{ cm} + \underline{\quad} \text{ cm} + \underline{\quad} \text{ cm}$$

$$+ \underline{\quad} \text{ cm} + \underline{\quad} \text{ cm} + \underline{\quad} \text{ cm} = \underline{\quad} \text{ cm}$$

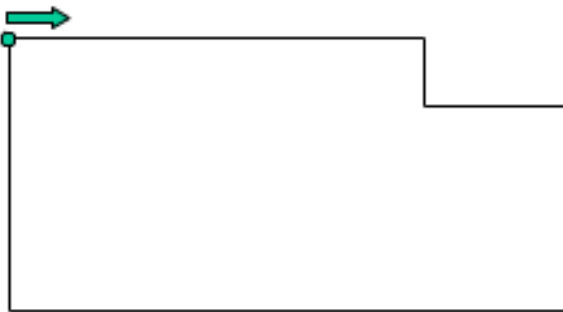
b)



$$\underline{\quad} + \underline{\quad} + \underline{\quad} + \underline{\quad}$$

$$+ \underline{\quad} + \underline{\quad} + \underline{\quad} = \underline{\quad}$$

c)

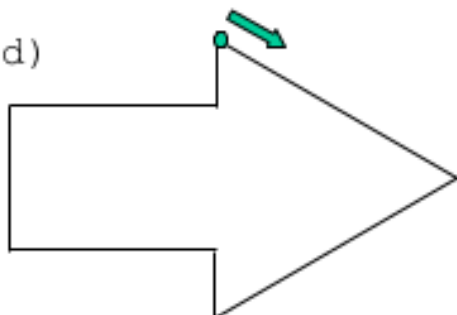


$$\underline{\quad} + \underline{\quad} + \underline{\quad}$$

$$+ \underline{\quad} + \underline{\quad} + \underline{\quad}$$

$$= \underline{\quad}$$

d)



$$\underline{\quad} + \underline{\quad} + \underline{\quad} + \underline{\quad}$$

$$+ \underline{\quad} + \underline{\quad} + \underline{\quad} = \underline{\quad}$$