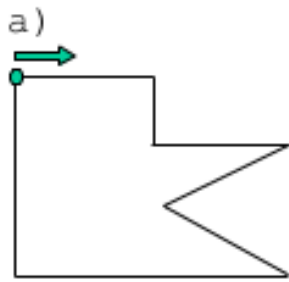
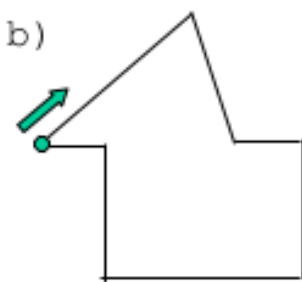


Messe die Formen nach. Wie groß ist der jeweilige Umfang? (2)



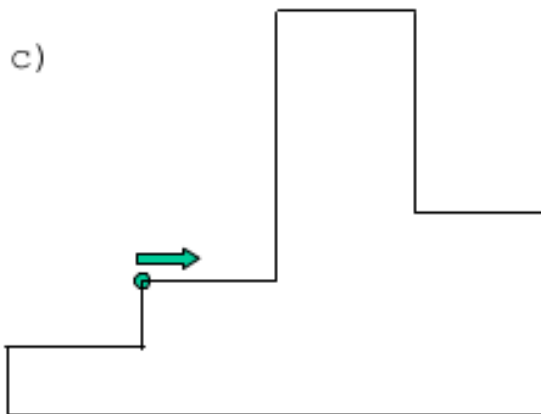
$$\underline{\quad} \text{ cm} + \underline{\quad} \text{ cm} + \underline{\quad} \text{ cm} + \underline{\quad} \text{ cm}$$

$$+ \underline{\quad} \text{ cm} + \underline{\quad} \text{ cm} + \underline{\quad} \text{ cm} = \underline{\quad} \text{ cm}$$



$$\underline{\quad} + \underline{\quad} + \underline{\quad} + \underline{\quad}$$

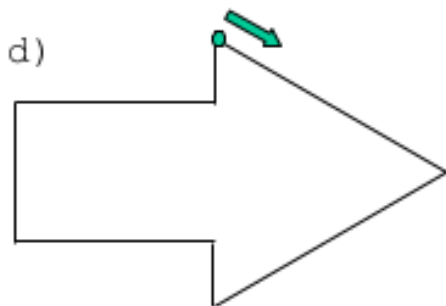
$$+ \underline{\quad} + \underline{\quad} + \underline{\quad} = \underline{\quad}$$



$$\underline{\quad} + \underline{\quad} + \underline{\quad} + \underline{\quad}$$

$$+ \underline{\quad} + \underline{\quad} + \underline{\quad} + \underline{\quad}$$

$$+ \underline{\quad} + \underline{\quad} = \underline{\quad}$$



$$\underline{\quad} + \underline{\quad} + \underline{\quad} + \underline{\quad}$$

$$+ \underline{\quad} + \underline{\quad} + \underline{\quad} = \underline{\quad}$$