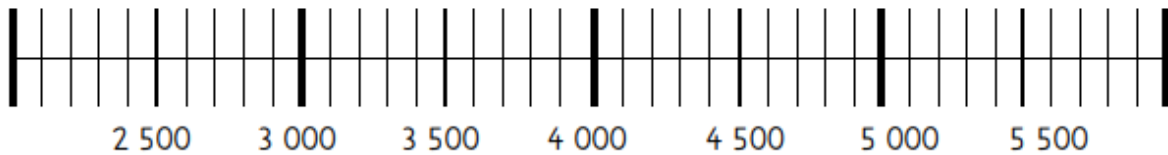
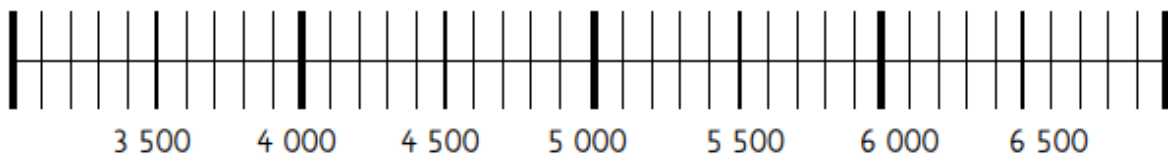


6. Übung zum Zahlenstrahl

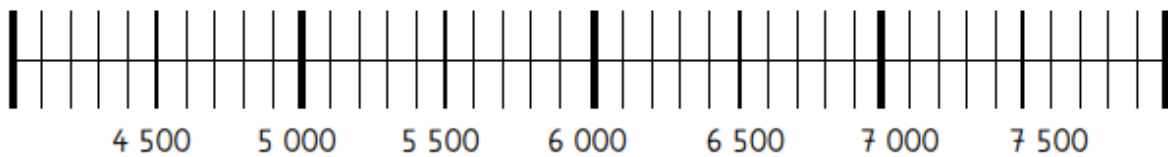
Berechne die Aufgabe und trage sie in den Zahlenstrahl ein!



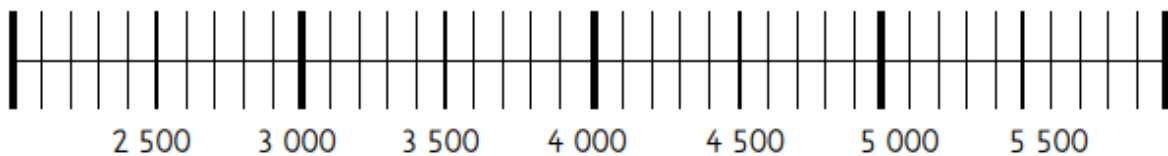
$$2\,400 + 2\,700 = \underline{\hspace{2cm}}$$



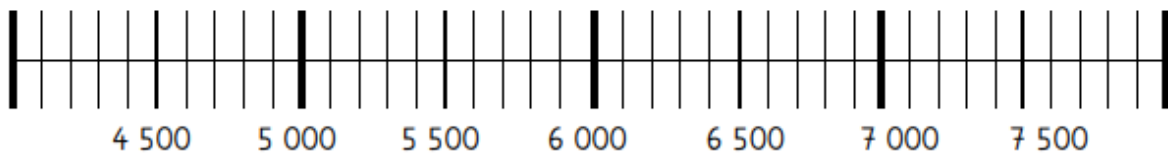
$$3\,600 + 2\,500 = \underline{\hspace{2cm}}$$



$$4\,100 + 1\,800 = \underline{\hspace{2cm}}$$



$$2\,500 + 1\,900 = \underline{\hspace{2cm}}$$



$$4\,900 + 1\,200 = \underline{\hspace{2cm}}$$