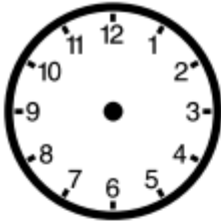
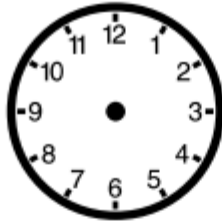


# A1 Uhrzeiten\_02

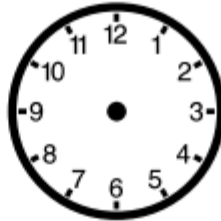
1. Zeichne die Uhrzeiger richtig ein!



18:15 Uhr



5:45 Uhr



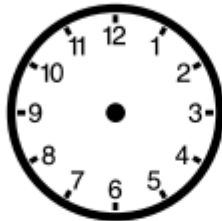
21:15 Uhr



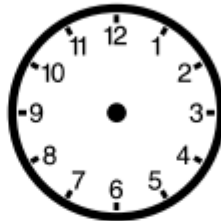
3:15 Uhr



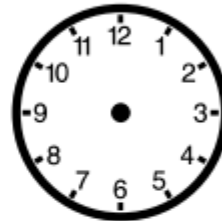
23:45 Uhr



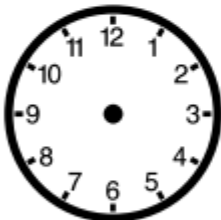
1:15 Uhr



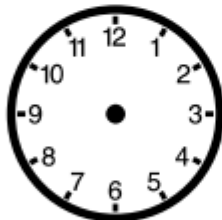
13:45 Uhr



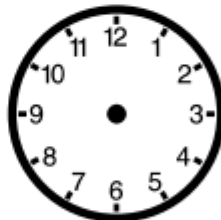
11:15 Uhr



7:15 Uhr



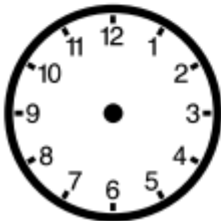
12:45 Uhr



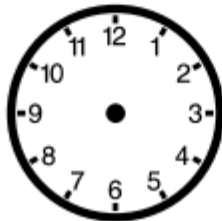
2:15 Uhr



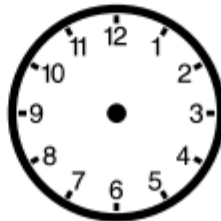
16:45 Uhr



12:45 Uhr



17:45 Uhr

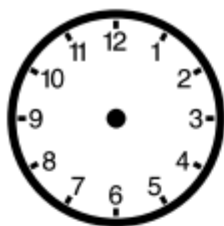


0:15 Uhr

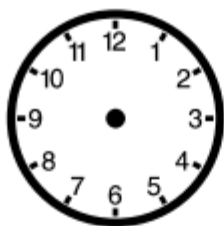


20:15 Uhr

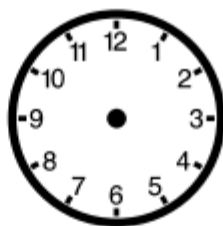
## 2. Zeichne die Uhrzeiger richtig ein!




16:25 Uhr



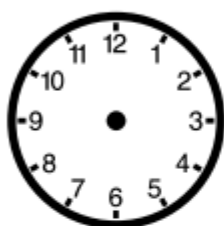
9:45 Uhr



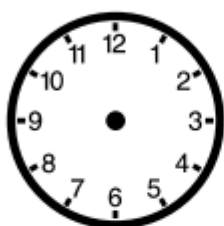
23:50 Uhr



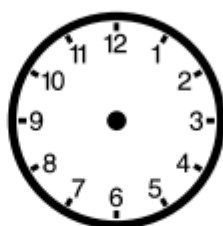
2:30 Uhr



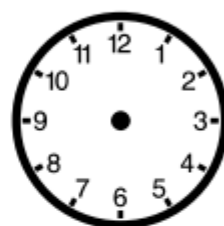
15:15 Uhr



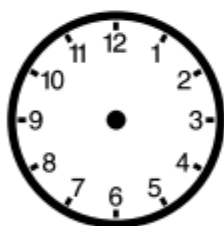
12:50 Uhr



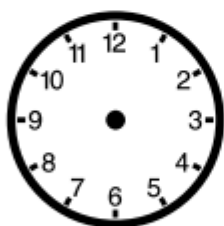
17:00 Uhr



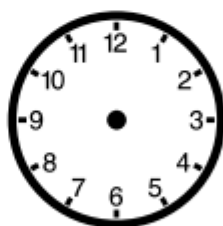
3:15 Uhr



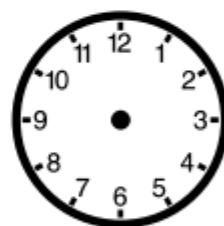
6:10 Uhr



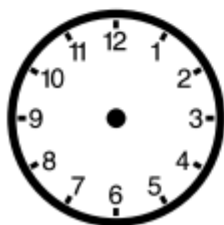
0:25 Uhr



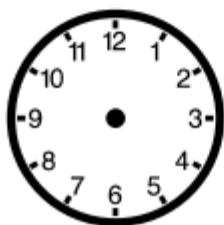
8:15 Uhr



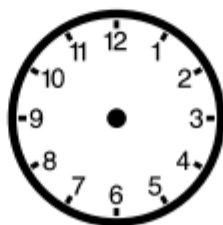
16:55 Uhr



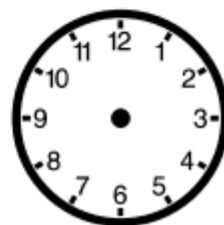
13:15 Uhr



20:35 Uhr



7:45 Uhr



14:50 Uhr