

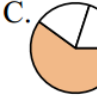
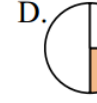




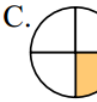
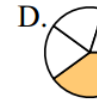
A1_Einführung Bruchrechnen: Grafische Brüche erkennen können_01

Stelle fest, welcher Buchstabe jeden Bruch darstellt.



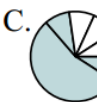

- 1) Bestimme, welche Auswahlmöglichkeit $\frac{1}{3}$ anzeigt?

A.		B.		C.		D.	
----	---	----	--	----	---	----	---



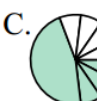
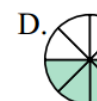
- 2) Bestimme, welche Auswahlmöglichkeit $\frac{1}{4}$ anzeigt?

A.		B.		C.		D.	
----	---	----	--	----	---	----	---

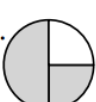
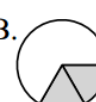
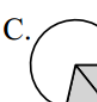
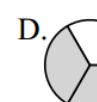
- 3) Bestimme, welche Auswahlmöglichkeit $\frac{3}{6}$ anzeigt?

A.		B.		C.		D.	
----	---	----	--	----	---	----	---


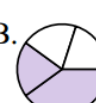
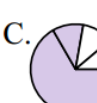
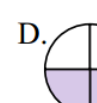
- 4) Bestimme, welche Auswahlmöglichkeit $\frac{4}{8}$ anzeigt?

A.		B.		C.		D.	
----	---	----	--	----	---	----	---


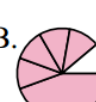
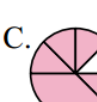
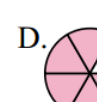
- 5) Bestimme, welche Auswahlmöglichkeit $\frac{2}{3}$ anzeigt?

A.		B.		C.		D.	
----	---	----	--	----	---	----	---



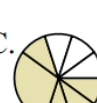

- 6) Bestimme, welche Auswahlmöglichkeit $\frac{2}{4}$ anzeigt?

A.		B.		C.		D.	
----	---	----	--	----	---	----	---



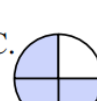

- 7) Bestimme, welche Auswahlmöglichkeit $\frac{5}{6}$ anzeigt?

A.		B.		C.		D.	
----	---	----	--	----	---	----	---





- 8) Bestimme, welche Auswahlmöglichkeit $\frac{5}{8}$ anzeigt?

A.		B.		C.		D.	
----	---	----	--	----	---	----	---





- 9) Bestimme, welche Auswahlmöglichkeit $\frac{3}{4}$ anzeigt?

A.		B.		C.		D.	
----	---	----	--	----	---	----	---





- 10) Bestimme, welche Auswahlmöglichkeit $\frac{1}{6}$ anzeigt?

A.		B.		C.		D.	
----	---	----	--	----	---	----	---

- 11) Bestimme, welche Auswahlmöglichkeit $\frac{3}{8}$ anzeigt?

A.		B.		C.		D.	
----	---	----	--	----	---	----	---

- 12) Bestimme, welche Auswahlmöglichkeit $\frac{2}{6}$ anzeigt?

A.		B.		C.		D.	
----	---	----	--	----	---	----	---