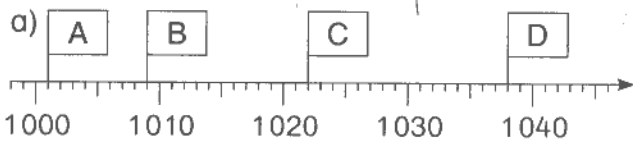
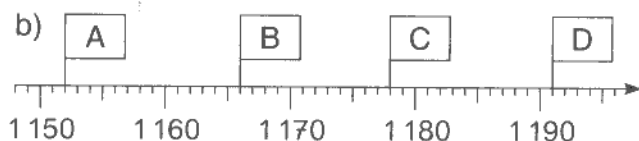


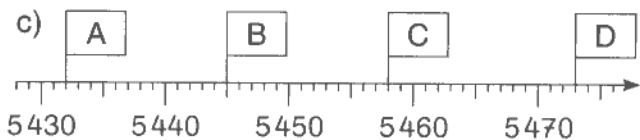
Zahlenstrahl!



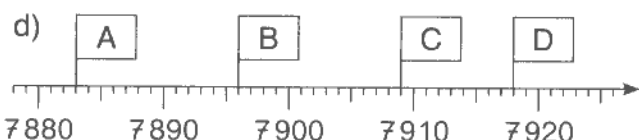
A: _____ B: _____ C: _____ D: _____



A: _____ B: _____ C: _____ D: _____

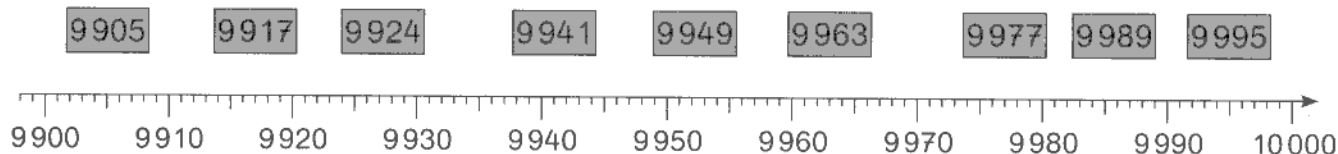


A: _____ B: _____ C: _____ D: _____



A: _____ B: _____ C: _____ D: _____

2



5

Welche Zahlen sind es?

a) Zwischen 4 735 und 4 740,

4 736, _____

b) Zwischen 4 817 und 4 822,

c) Zwischen 8 998 und 9 003,

d) Zwischen 7 896 und 7 901.
